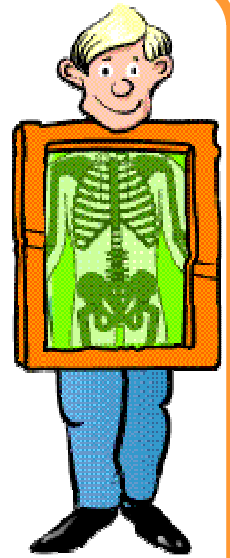


Os, squelettes et mouvements

Prénom :

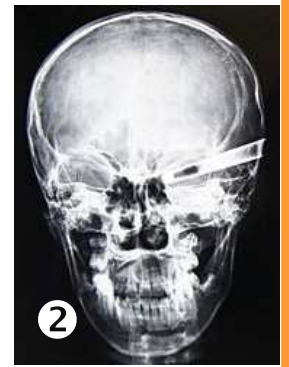
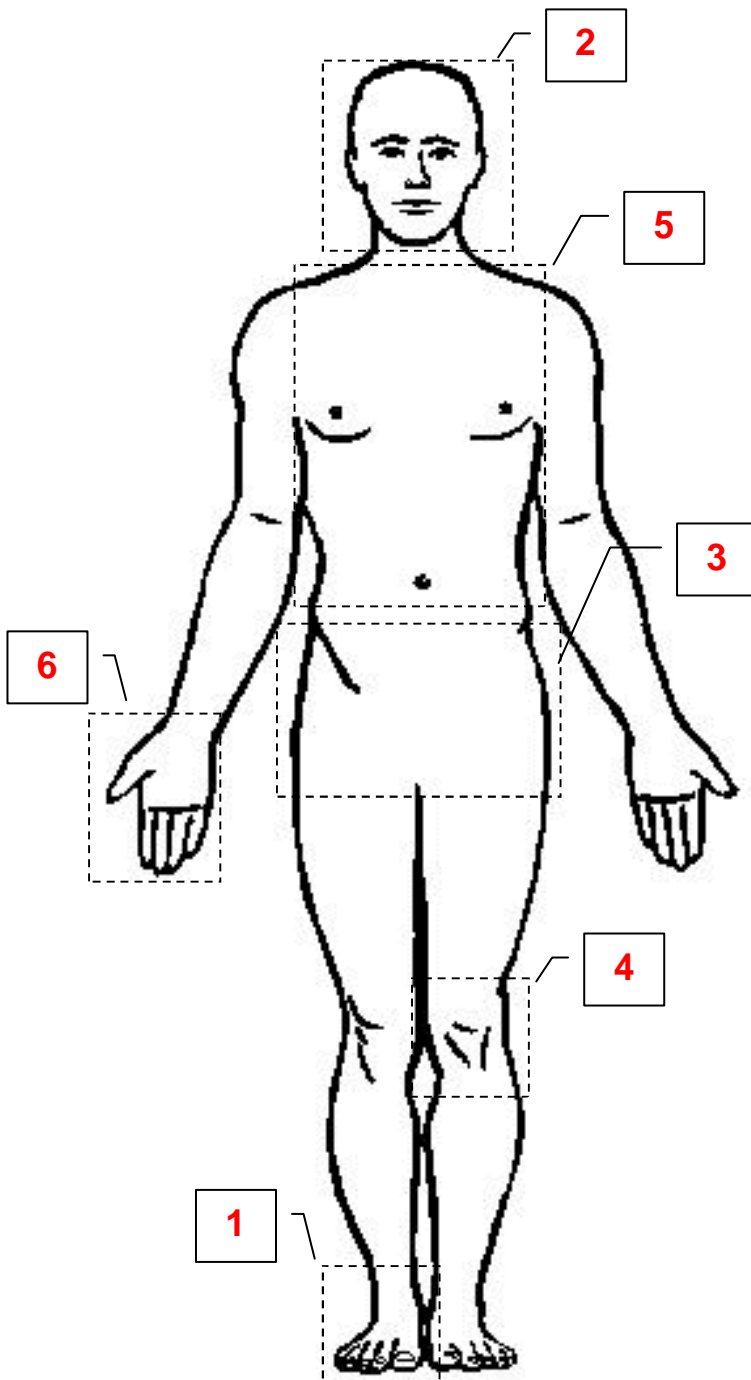
Date :/...../..... Classe : ..



Questionnaire - cycle 2

Fais tes premiers pas de radiologie !

Associe chacune de ces radiographies à la partie du corps correspondante.



Os, squelettes et mouvements

Questionnaire - cycle 2

Relie par un trait de couleur
chaque animal à sa radiographie

The image contains seven pairs of images, each consisting of a photograph of an animal and a corresponding X-ray of its skeleton. The connections are as follows:

- Snake:** Photograph of a snake on the ground is connected to its X-ray by a red arrow.
- Donkey:** Photograph of a brown donkey is connected to its X-ray by a yellow arrow.
- Hare:** Photograph of a brown hare is connected to its X-ray by a pink arrow.
- Goldfish:** Photograph of a colorful goldfish is connected to its X-ray by a cyan arrow.
- Bird:** Photograph of a brown bird in flight is connected to its X-ray by a brown arrow.
- Turtle:** Photograph of a turtle is connected to its X-ray by a black arrow.
- Rabbit:** Photograph of a white rabbit is connected to its X-ray by a black arrow.